

Exercises 1.1, 1.2, and 1.3

Ex 1.1 (Answer with the correct number)

A whole note = half notes,

A whole note = quarter notes

A whole note = eighth notes,


A half note = quarter notes


A half note = eighth notes,


A quarter note = eighth notes


Ex 1.2

Add the note values together for the following groupings: (The first two are done as examples)


 = 3 beats


 = 2 beats


 = beats


 = beats


 = beats

 = beats

 = beats

 = beats

 = beats

 = beats

Ex 1.3

Add the note values together for the following groupings:

